

© Dandi Palmer '96

Vi regner ut bilder

Elevene regner ut matematikkstykkene. Her er det både addisjon- og subtraksjonsoppgaver.

Eleven klipper ut alle de små bildebitene.

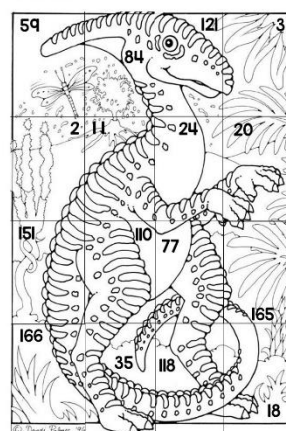
Eleven finner bildekortet med riktig sum på.

Denne biten limes rett oppå mattestykket.

Bildet kan også fargelegges.

Lykke til!

FASIT



opprettet av

Regn ut svarene.

Finn riktig bilde med riktig svar og lim oppå stykket

$$\begin{array}{r} 32 \\ + 27 \\ \hline = \end{array}$$

$$\begin{array}{r} 64 \\ + 20 \\ \hline = \end{array}$$

$$\begin{array}{r} 69 \\ + 52 \\ \hline = \end{array}$$

$$\begin{array}{r} 19 \\ + 11 \\ \hline = \end{array}$$

$$\begin{array}{r} 54 \\ - 52 \\ \hline = \end{array}$$

$$\begin{array}{r} 63 \\ - 52 \\ \hline = \end{array}$$

$$\begin{array}{r} 38 \\ - 14 \\ \hline = \end{array}$$

$$\begin{array}{r} 72 \\ - 52 \\ \hline = \end{array}$$

$$\begin{array}{r} 63 \\ + 88 \\ \hline = \end{array}$$

$$\begin{array}{r} 92 \\ + 18 \\ \hline = \end{array}$$

$$\begin{array}{r} 34 \\ + 43 \\ \hline = \end{array}$$

$$\begin{array}{r} 78 \\ + 87 \\ \hline = \end{array}$$

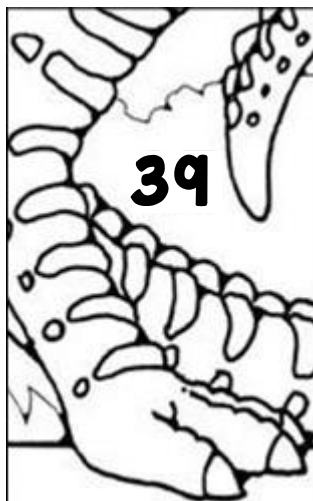
$$\begin{array}{r} 114 \\ + 52 \\ \hline = \end{array}$$

$$\begin{array}{r} 52 \\ - 13 \\ \hline = \end{array}$$

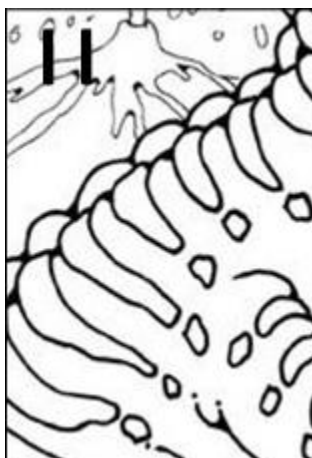

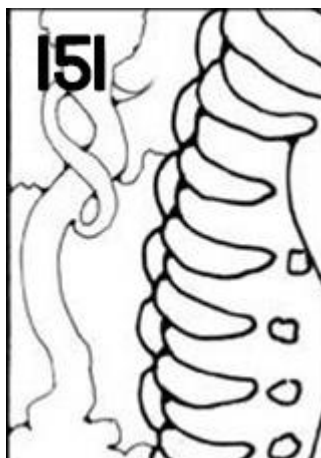
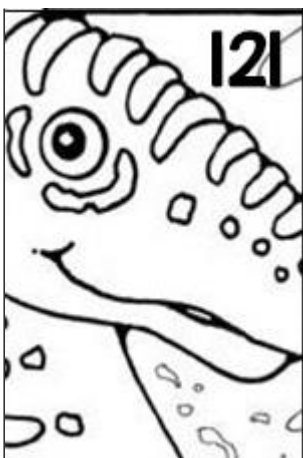

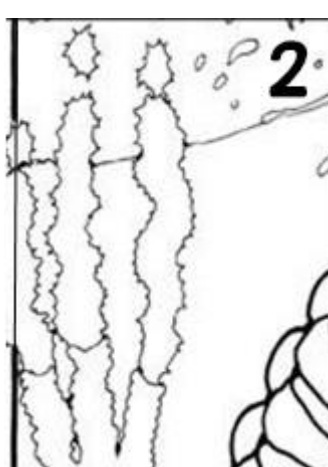

$$\begin{array}{r} 95 \\ + 23 \\ \hline = \end{array}$$

$$\begin{array}{r} 60 \\ - 42 \\ \hline = \end{array}$$

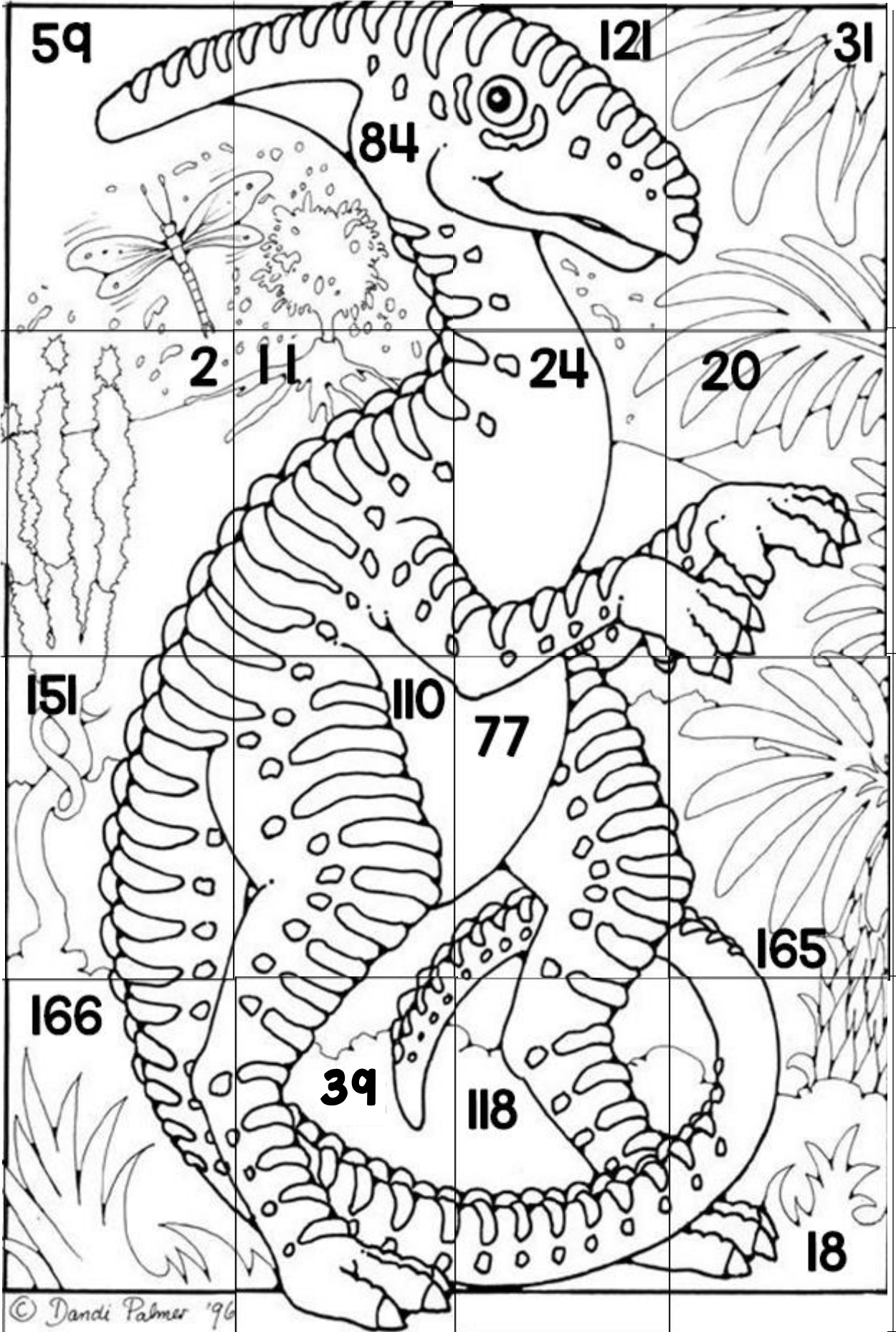
Klipp ut hver rute og lim en etter en inn over riktig mattestykke



www.spireserien.no



FASIT



© Dandi Palmer '96