


SpireGro 1




Hønemor la ett egg hver dag i 2 uker.




Hvor mange egg hadde hun tilsammen?

SpireGro 2



Hønemor la 2 egg hver dag i 2 uker.




Hvor mange egg hadde hun tilsammen?

SpireGro 3




Hønemor la 3 egg hver dag i 2 uker.



Hvor mange egg hadde hun da?


SpireGro 4



Den lille kyllingen hadde 12 søsken, men en dag kom reven og spiste opp 5. Hvor mange var det igjen da?




SpireGro 5



Den lille kyllingen hadde 14 søsken, men en dag kom reven og spiste opp 6. Hvor mange var det igjen da?



SpireGro 6



Den lille kyllingen hadde 15 søsken, men en dag kom reven og spiste opp 8. Hvor mange var det igjen da?





SpireGro 7

Påkeharen måtte hente

4 egg 

3 ganger inni huset sitt for å
få nok egg til barna.

Hvor mange barn var det?



SpireGro 8

Påkeharen måtte hente

3 egg 

5 ganger inni huset sitt for å
få nok egg til barna.

Hvor mange barn var det?



SpireGro 9

Påkeharen måtte hente

2 egg 



6 ganger inni huset sitt for å
få nok egg til barna.

Hvor mange barn var det?

SpireGro 10



Den brune påseharen hadde 4 egg i kurven sin





Den hvite påseharen hadde dobbelt så mange. Hvor mange egg hadde den hvite haren?

SpireGro 11



Den brune påseharen hadde 6 egg i kurven sin





Den hvite påseharen hadde dobbelt så mange.

Hvor mange egg hadde den hvite haren?

SpireGro 12



Den brune påseharen hadde 9 egg i kurven sin





Den hvite påseharen hadde dobbelt så mange.

Hvor mange egg hadde den hvite haren?

SpireGro 13



Den brune påkeharen hadde 4 egg i kurven sin




Den hvite påkeharen hadde dobbelt så mange.

Hvor mange egg hadde de tilsammen?

SpireGro 14



Den brune påkeharen hadde 6 egg i kurven sin





Den hvite påkeharen hadde dobbelt så mange.

Hvor mange egg hadde de tilsammen

SpireGro 15




Den brune påkeharen hadde 9 egg i kurven sin



Den hvite påkeharen hadde dobbelt så mange.

Hvor mange egg hadde de tilsammen

SpireGro 16



Hønemor la ett egg hver dag i
1 uke.

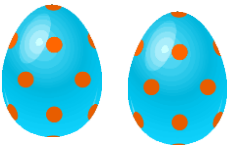


Hvor mange egg hadde hun
tilsammen?

SpireGro 17



Hønemor la 2 egg hver dag i
1 uke.




Hvor mange egg hadde hun
tilsammen?

SpireGro 18

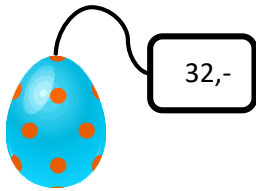


Hønemor la 3 egg hver dag i
1 uke.



Hvor mange egg hadde hun
da?

SpireGro 19



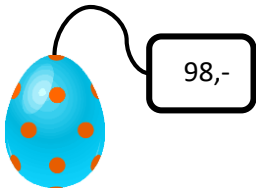
32,-



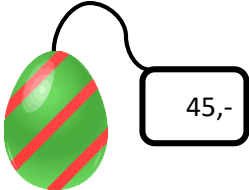
47,-

Hva koster disse to eggene til sammen?

SpireGro 20



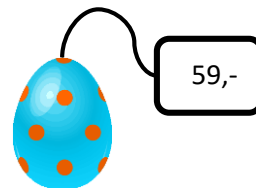
98,-



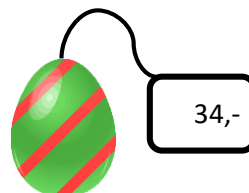
45,-

Hva koster disse to eggene til sammen?

SpireGro 21



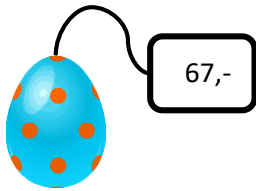
59,-



34,-

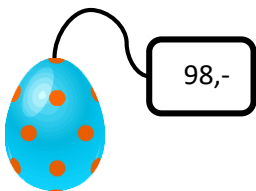
Hva koster disse to eggene til sammen?

SpireGro 22



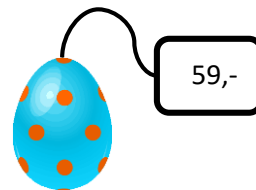
Hvor mye mer koster det ene egget i forhold til det andre?

SpireGro 23



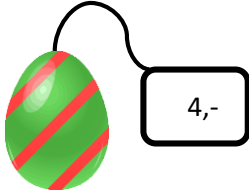
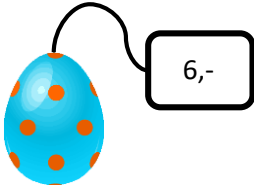
Hvor mye mer koster det ene egget i forhold til det andre?

SpireGro 24



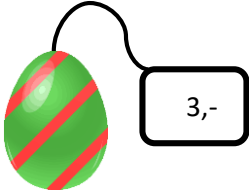
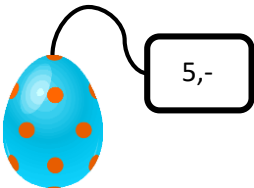
Hvor mye mer koster det ene egget i forhold til det andre?

SpireGro 25



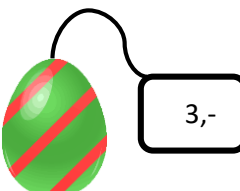
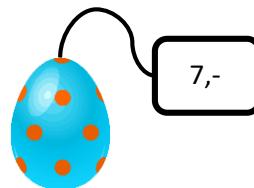
Hva koster disse to eggene
til sammen?

SpireGro 26



Hva koster disse to eggene
til sammen?

SpireGro 27



Hva koster disse to eggene
til sammen?