













Hvilke tall skjuler seg bak figurene?

		3	4	5	6	7	8			
11	12	13	14	15		17	18			
	21	22	23	24	25	26	27	28	29	30
31		33	34	35	36	37	38		40	
41	42	43	44		46	47	48	49	50	
51	52	53	54	55		57	58	59	60	
	62	63	64			67	68	69	70	
71	72	73	74	75	76	77	78	79	80	
81		83	84	85	86	87	88	89	90	
91	92	93	94	95	96	97	98	99	100	





















Illustrasjon shutterstock




Kva for nokre tal skjuler seg bak figurane?

		3	4	5	6	7	8			
11	12	13	14	15		17	18			
	21	22	23	24	25	26	27	28	29	30
31		33	34	35	36	37	38		40	
41	42	43	44		46	47	48	49	50	
51	52	53	54	55		57	58	59	60	
	62	63	64			67	68	69	70	
71	72	73	74	75	76	77	78	79	80	
81		83	84	85	86	87	88	89	90	
91	92	93	94	95	96	97	98	99	100	











Illustrasjon shutterstock

