










# Hvilke tall skjuler seg bak figurene?








	2	3	4	5	6	7	8	9	10
	13	14	15		17	18	19	20	
21		23	24	25		27	28	29	30
31	32	33	34	35	36	37	38		40
41		43	44	45	46	47	48		50
51	52	53	54	55	56	57	58	59	60
61	62	63	64	65	66	67			70
71	72		74	75	76	77		79	80
81	82		84	85	86	87	88	89	90
91	92		94	95	96	97	98	99	100


# Kva for nokre tal skjuler seg bak figurane?

	2	3	4	5	6	7	8	9	10
	13	14	15		17	18	19	20	
21		23	24	25		27	28	29	30
31	32	33	34	35	36	37	38		40
41		43	44	45	46	47	48		50
51	52	53	54	55	56	57	58	59	60
61	62	63	64	65	66	67			70
71	72		74	75	76	77		79	80
81	82		84	85	86	87	88	89	90
91	92		94	95	96	97	98	99	100